

Name _____

My Homework

Lesson 2


Count On to Add

Homework Helper



Need help? connectED.mcgraw-hill.com

Use a number line to find $9 + 3$. Start with the greater addend. Count on to add.



$$9 + 3 = 12$$

Practice

Count on to add. Use the number line above.

1. $4 + 1 =$ _____

2. $2 + 6 =$ _____

3. $1 + 8 =$ _____

4. $3 + 6 =$ _____

5. $2 + 4 =$ _____

6. $2 + 8 =$ _____

7.
$$\begin{array}{r} 3 \\ + 9 \\ \hline \end{array}$$

8.
$$\begin{array}{r} 4 \\ + 3 \\ \hline \end{array}$$

9.
$$\begin{array}{r} 1 \\ + 4 \\ \hline \end{array}$$

Read and then solve the problems.

10. 6 bees are buzzing near a hive.
3 more bees come out of the hive.
How many bees are there now?

_____ bees


11. Cherie has 5 trading cards. She gets
3 more cards. How many cards does
Cherie have now?

_____ cards

12. There are 8 butterflies on a bush. 3 more
butterflies fly onto the bush. How many
butterflies are on the bush now?



_____ butterflies



Vocabulary Check

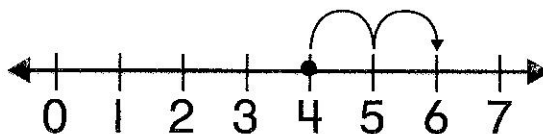


Draw lines to match.

13. count on

$$\underset{\uparrow}{6} + \underset{\uparrow}{3} = 9$$

14. addend



Math at Home Give your child an addition fact. Have him or her count on from the greater number to find the sum.