

# My Homework


**Lesson 3****Doubles and  
Near Doubles****Homework Helper**Need help? [connectED.mcgraw-hill.com](http://connectED.mcgraw-hill.com)

Two addends that are the same are called doubles.

Two addends that are almost a doubles fact are called near doubles.

**Doubles**

$$4 + 4 = 8$$

**Near Doubles**

$$4 + 5 = 9$$

**Practice**

Add. Circle the doubles facts.

1.  $5 + 7 = \underline{\quad}$

2.  $2 + 3 = \underline{\quad}$

3.  $5 + 5 = \underline{\quad}$

4.  $8 + 7 = \underline{\quad}$

5. 
$$\begin{array}{r} 4 \\ + 2 \\ \hline \end{array}$$

6. 
$$\begin{array}{r} 4 \\ + 4 \\ \hline \end{array}$$

7. 
$$\begin{array}{r} 6 \\ + 7 \\ \hline \end{array}$$

8. 
$$\begin{array}{r} 8 \\ + 8 \\ \hline \end{array}$$

**Add. Circle the near doubles facts.**

9.  $2 + 9 =$  \_\_\_\_\_

10.  $12 + 3 =$  \_\_\_\_\_

11.  $4 + 5 =$  \_\_\_\_\_

12.  $8 + 8 =$  \_\_\_\_\_


13.  $9 + 8 =$  \_\_\_\_\_

14.  $7 + 6 =$  \_\_\_\_\_

**Solve. Then write the doubles fact that helped you solve the problem.**

15. 4 frogs are sitting beside a pond. 5 dragon flies land beside them. How many animals are there altogether?

$$\begin{array}{r} \underline{\quad\quad} + \underline{\quad\quad} = \underline{\quad\quad} \text{ animals} \\ \underline{\quad\quad} + \underline{\quad\quad} = \underline{\quad\quad} \end{array}$$




## Vocabulary Check

Vocab

**Draw lines to match.**

16. **near doubles**       $4 + 4 = 8$

17. **doubles**       $4 + 5 = 9$



**Math at Home** Have your child use objects to make doubles and tell the addition fact.