

Name _____

My Homework

Lesson 2

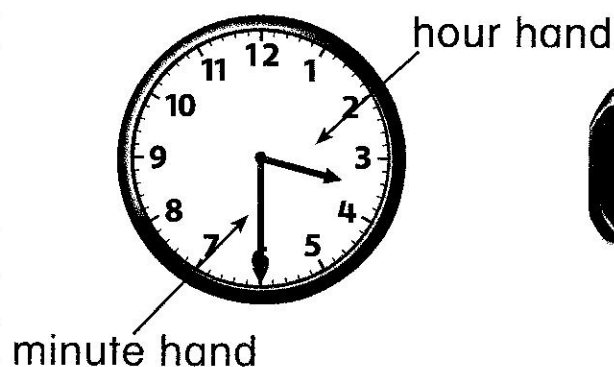
Time to the Half Hour

Homework Helper



Need help? connectED.mcgraw-hill.com

You can tell and write time to the half hour.





hour minutes after hour

It is half past 3 or 3:30.

Practice


Tell what time is shown. Write the time.

1.





half past _____

2.



half past _____



3.




half past _____

Draw the hands on each clock. Write the time.


4. half past 1



5. half past 11



6. Tatum is going to the city with her family. They will leave one hour after she gets home from school. Tatum gets home from school at 3:30. What will the clocks look like when they leave?





Vocabulary Check



Show a **half hour** later on the second clock.

7.



Math at Home Give your child a time to the hour. Have him or her tell you the position of the clock hands for half past that hour or in a half hour.