

Name _____

My Homework

Lesson 4

Time to the Quarter Hour


Homework Helper




Need help? connectED.mcgraw-hill.com

You can show time to the quarter hour.


quarter past 8



half past 8





quarter till 9




Practice

Use . Tell what time is shown. Write the time.


1.



2.







3.



Draw the hands on each clock. Write the time.

4. quarter past 6 5. quarter till 3 6. quarter past 7



7. Carly left for school at 8:15. She left school at 2:45. If she arrived at school at 8:45, how many hours was she in school?

_____ hours

Vocabulary Check

8. Circle the clock that shows an example of quarter hour.



Math at Home Have your child use the words quarter till and quarter past to describe the time at 6:15 and 6:45.