

Name _____

My Homework

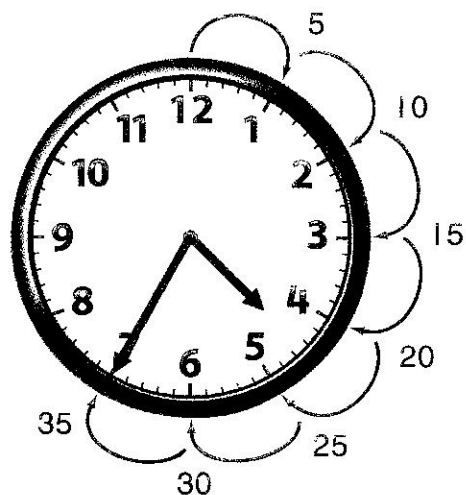
Lesson 5

Time to Five-Minute Intervals

Homework Helper



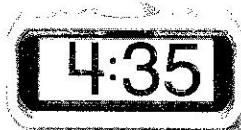
Need help? connectED.mcgraw-hill.com



It takes 5 minutes for the minute hand to move to the next number. Skip count by 5s to tell time.

This clock shows 35 minutes after 4 o'clock.


The time is shown another way.




Practice

Read the time. Write the time.


1.






2.





3.



Tell what time is shown. Draw the minute hand to show the time.






7. It is 1:00. Hunter is waiting for Ben. Ben said he would meet Hunter in 25 minutes but he arrived 5 minutes late. What time does Ben meet Hunter?



Test Practice

8. A train leaves at 10:40. Which clock shows 10:40?



Math at Home Ask your child to look at an analog clock on the hour. Have him or her tell you what time it will be in 5 minutes, 10 minutes, 25 minutes, and 50 minutes.