

Name _____

My Homework

Lesson 6

A.M. and P.M.

Homework Helper



Need help? connectED.mcgraw-hill.com


The hours from midnight until noon are labeled A.M. The hours from noon until midnight are labeled P.M.

Helpful Hint

12:00 P.M. is noon.



12:00 A.M. is midnight.

Wake Up



9:00 A.M.



Look at the Moon




9:00 P.M.

Tell what time is shown for the activity. Write the time.
Circle A.M or P.M.



1. Go to the Park 2. Go Bowling 3. Make your Bed



A.M.
P.M.



A.M.
P.M.




A.M.
P.M.

Tell what time is shown for the activity.


Draw the hands on the clock. Circle A.M. or P.M.

4. Rooster Crowing




A.M.
P.M.

5. Flying a Kite



A.M.
P.M.

6. Going Shopping



A.M.
P.M.

7. Jay and Mike went to the county fair with Mike's parents. They got there at 10:00 A.M. They stayed for 4 and a half hours. Did they get home in the A.M or P.M.? _____

Hey, it's time to
WAKE UP!



Vocabulary Check



Complete each sentence.

A.M.

P.M.

8. Casey has an art lesson at 4:30. _____.
9. Sam eats dinner at 5:30 _____.
10. Kaylee eats breakfast at 6:00 _____.



Math at Home Several times in the next 24 hours, ask your child for the time and then if it is A.M. or P.M.