

Name

My Review

Chapter 10

Time

Vocabulary Check



Complete each sentence.

hour

half hour

quarter hour

minute

A.M.

P.M.


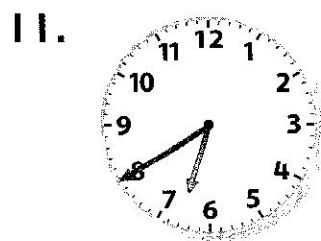

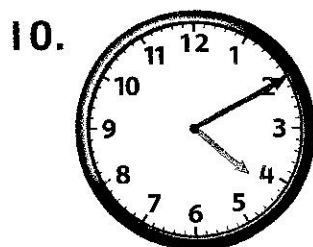

digital

analog



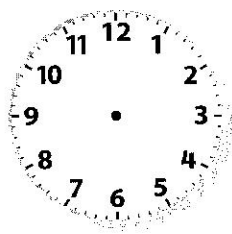

1. The long hand on an analog clock is the _____ hand.
2. The short hand on an analog clock is the _____ hand.
3. 15 minutes is a _____.
4. 30 minutes is a _____.
5. A clock that uses hands to show the time is an _____ clock.
6. A clock that uses numbers to show the time is a _____ clock.
7. The hours from noon to midnight are _____.
8. The hours from midnight to noon are _____.

Concept Check

Read the time. Write the time.



Tell what time is shown. Draw the hands on each clock.



Circle the best choice.

15. Walk the dog.

11:45

A.M.

P.M.

16. Go hiking.

2:30

A.M.

P.M.

17. Wash dinner dishes.

6:30

A.M.



P.M.

Name _____




Problem Solving

18. On a clock, the hour hand is between the 2 and 3. The minute hand is on the 5. What time is it? Show the time on both clocks.




19. The time is 9:00. In 6 hours, Greg will leave school. What time will it be in 6 hours? Circle A.M. or P.M.



_____ A.M. P.M.


20. Derek has baseball practice at 2:30. Luke has practice at 4:15. Show the times on the clocks. Write the time and circle if it would be A.M. or P.M.

Derek



_____ A.M.
P.M.

Luke



_____ A.M.
P.M.

Test Practice

21. The boat picked up passengers every half hour. If the first boat arrives at 8:00 A.M., when will the fourth boat arrive?

12:00 P.M.



10:00 A.M.



9:30 A.M.



10:30 A.M.



Reflect

Chapter 10

Answering the
Essential Question




Show the ways to write and use time.

Draw the hands to
show the time.




Digital



Analog

Write the time.




ESSENTIAL
QUESTION



How do I use and
tell time?



Skip count by
5s. Tell the time.



Skip count by fives.
The time is _____.

Draw the hands.
Write the time.

quarter past 5 half past 5



You'll sail through this!

