

Name _____

My Homework

Lesson 10

Relate Centimeters and Meters


Homework Helper



Need help? connectED.mcgraw-hill.com

You can use different units of length to measure the same object.

The yarn is 2 meters long.
It is 200 centimeters long.



Practice


Find the object. Measure the length of each object twice.

Object		Measure	
1.		_____ centimeters	_____ meters
2.		_____ centimeters	_____ meters
3.		_____ centimeters	_____ meters

Find the object. Measure the length of each object twice.

Object	Measure
--------	---------


4.



_____ centimeters

_____ meters

5.



_____ centimeters

_____ meters

6. At the end of the race, Carly was 3 meters ahead of Reagan. How many centimeters was she ahead of Reagan?

_____ centimeters



Test Practice

7. $35 \text{ centimeters} + 65 \text{ centimeters} =$ _____

1 centimeter



1 meter



90 centimeters



2 meters



Math at Home Have your child measure an object in your house using centimeters and meters. Discuss how each measurement relates to the size of the unit.