

Name _____

My Homework

Lesson 2

Feet and Yards

Homework Helper




Need help? connectED.mcgraw-hill.com

One foot is equal to 12 inches. One yard is equal to 36 inches. A ruler is 1 foot long. A yardstick is 1 yard long.



Helpful Hint

3 feet = 36 inches


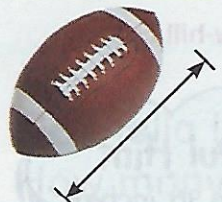



Practice

Find the object. Estimate the length. Measure each object in feet or yards.

Object	Estimate	Measure
1. 	about _____ feet	about _____ feet
2. 	about _____ yards	about _____ yards

Find the object. Estimate the length. Measure each object in feet or yards.

Object	Estimate	Measure
3. 	about _____ yards	about _____ yards
4. 	about _____ foot	about _____ foot
5. 	about _____ feet	about _____ feet

6. The sidewalk from Ameila's house to her driveway is 96 inches long. How many feet long is the sidewalk?

_____ feet

Sidewalk race!

Vocabulary Check



Circle the correct answer.


7. **foot**

3 yards

12 inches

36 inches

1 yard



Math at Home Ask your child to measure his or her room using a yardstick or a ruler.