

Name _____

My Homework

Lesson 7

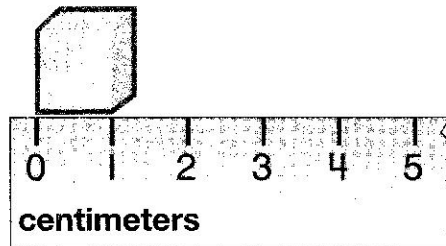
Centimeters and Meters

Homework Helper






Need help? connectED.mcgraw-hill.com

The cube is 1 centimeter long.
There are 100 centimeters in
1 meter.



Practice


Find the object. Estimate the length. Measure each object in centimeters or meters.

Object	Estimate	Measure
1. 	about _____ centimeters	about _____ centimeters
2. 	about _____ centimeters	about _____ centimeters
3. 	about _____ meters	about _____ meters

Find the object. Estimate the width. Measure each object in centimeters or meters.

Object	Estimate	Measure
--------	----------	---------


4.



about _____
centimeters

about _____
centimeters

5.



about _____
meters

about _____
meters

6. One pine tree is 4 meters tall. The other pine tree is 3 meters tall. How many centimeters taller is the first pine tree?

_____ centimeters

Vocabulary Check



7. Circle the answer that is the same as 1 **meter**.

1 centimeter

10 centimeters

100 centimeters

1,000 centimeters



Math at Home Have your child identify objects he or she would measure using centimeters.