

Name \_\_\_\_\_

# My Homework

## Lesson 9

### Compare Metric Lengths


#### Homework Helper



Need help? [connectED.mcgraw-hill.com](http://connectED.mcgraw-hill.com)

You can compare lengths of objects.

10 centimeters




7 centimeters

The brown guinea pig is 3 centimeters longer.

## Practice

Find the objects. Measure them. Write the lengths.  
Write longer or shorter.

1.




\_\_\_\_\_ centimeters



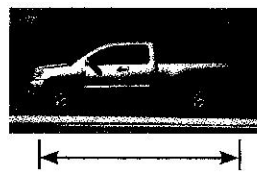
\_\_\_\_\_ centimeters

The spoon is \_\_\_\_\_ centimeters \_\_\_\_\_.

2.



\_\_\_\_\_ meters



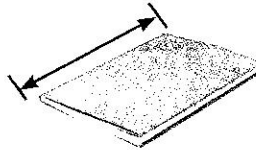
\_\_\_\_\_ meters

The house is \_\_\_\_\_ meters \_\_\_\_\_.

Find the objects. Measure them. Write the lengths.  
Write longer or shorter.




\_\_\_\_\_ centimeters

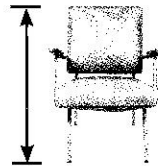


\_\_\_\_\_ centimeters

The crayon is \_\_\_\_\_ centimeters \_\_\_\_\_.



\_\_\_\_\_ meters



\_\_\_\_\_ meters

The couch is \_\_\_\_\_ meters \_\_\_\_\_.



5. The path from my house to the barn is 50 meters. The path from the barn to the pond is 30 meters. How long is the path in all?

\_\_\_\_\_ meters

## Test Practice

6.  $56 \text{ meters} + 35 \text{ meters} = \underline{\hspace{2cm}} \text{ meters}.$

86  
☐

87  
☐

91  
☐

95  
☐



**Math at Home** Have your child measure two beds in your house and compare the lengths in meters.