

Name _____

My Homework

Lesson 2


Skip Count by 2s,
5s and 10s

Homework Helper



Need help? connectED.mcgraw-hill.com

Make equal groups and skip count to find the total.



3 equal groups

2

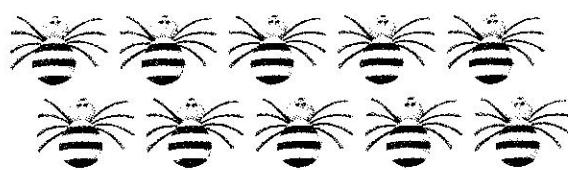
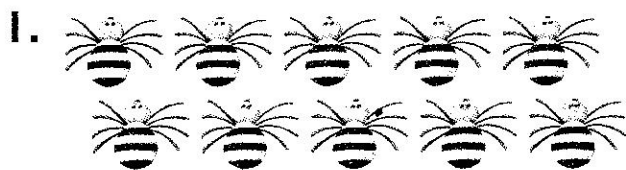
4

6

owls in all

Practice

Skip count to find the total.



_____ groups of _____ spiders in all



_____ groups of _____ turtles in all

Solve. Draw a picture to help, if needed.

3. Evan has 6 groups of 5 toy cars. How many toy cars does he have in all?

_____ toy cars

Field Trip!

4. Mrs. Hanes is planning a field trip. There are 6 groups of 10 students going. How many students are going on the field trip?

_____ students




5. Austen has 6 sets of 10 baseball cards. Tim has 3 sets of 10 baseball cards. How many baseball cards do they have in all?

_____ baseball cards

Vocabulary Check



6. Circle **equal groups** of five buttons.



Math at Home Use buttons, macaroni, or pennies. Have your child make equal groups of 2s, 5s, and 10s. Have him or her skip count to find the totals.