

Name \_\_\_\_\_

# My Homework

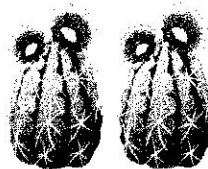
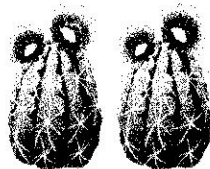
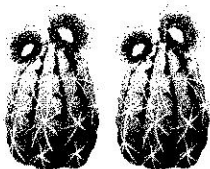
## Lesson 4

### Repeated Addition

Homework Helper 

Need help?  [connectED.mcgraw-hill.com](http://connectED.mcgraw-hill.com)

When groups are equal, use repeated addition to find the total.



$$2 + 2 + 2 = 6 \text{ cactus}$$

## Practice

Add.

1.



$$+ + + =$$

\_\_\_\_\_

2.



$$+ + =$$

\_\_\_\_\_

Add.

3.



$$\underline{\quad\quad} + \underline{\quad\quad} = \underline{\quad\quad} \text{ lady bugs}$$


Use repeated addition to solve.

4. Marco has 4 fish tanks. Each tank has 10 fish.  
How many fish does Marco have in all?

           fish

5. Mandy has 4 boxes of raisins. Each box has 5 raisins. How many raisins does Mandy have?

           raisins



## Vocabulary Check



6. Circle the **repeated addition** sentence.

5, 10, 15, 20

$9 + 3 + 9$

$3 + 3 + 3$



**Math at Home** Have your child put beans or pennies in 5 equal groups of 6 to show repeated addition. Ask them to write a number sentence and solve.