

Name _____

My Homework

Lesson 6


Even and Odd Numbers

Homework Helper



Need help? connectED.mcgraw-hill.com


An even number of objects can be counted by 2s.



Helpful Hint

Make pairs.
Circle them.

An odd number of objects has 1 left over when counted by 2s.



Practice

Use buttons or pennies to show each number.

Circle *even* or *odd*.

1. 8 even

8

odd

2. 16 even

16

odd

3. 11 even

11

odd

4. 19 even

19

odd


Write the number of buttons. Circle *even* or *odd*.

5.



_____ even odd

6.



_____ even odd


7.




_____ even odd

Helpful Hint

Circle pairs. If none are left over, the number is even.



Red Rover! Red Rover!
Let Billy come over!



8. Katy has 13 oranges, 12 apples, and 6 bananas. She also has two boxes. Which fruit cannot be put evenly into the two boxes?

Vocabulary Check



Draw lines to match.

9. odd

A number that can be counted by 2s.

10. even

A number that can be counted by 2s and has one left over.



Math at Home Give your child random numbers up to 20 and let them tell you if they are even or odd. Use buttons or coins if needed.