

Name _____

My Homework

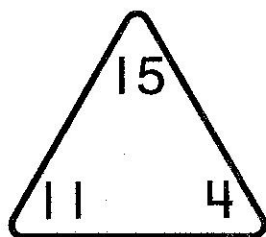
Lesson 1

Two-Digit Fact Families

Homework Helper



Need help? connectED.mcgraw-hill.com



The numbers 15, 11, and 4 make up the numbers in a fact family.

$$11 + 4 = 15$$

$$15 - 11 = 4$$

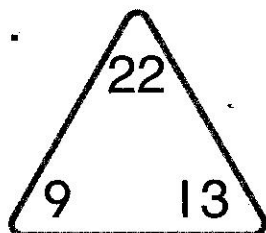
$$4 + 11 = 15$$

$$15 - 4 = 11$$

Practice

Complete each fact family.

1.



$$\underline{\quad} + \underline{\quad} = \underline{\quad}$$

$$\underline{\quad} - \underline{\quad} = \underline{\quad}$$

$$\underline{\quad} + \underline{\quad} = \underline{\quad}$$

$$\underline{\quad} - \underline{\quad} = \underline{\quad}$$

2.

21

$$\underline{\quad} + \underline{\quad} = \underline{\quad}$$

$$\underline{\quad} - \underline{\quad} = \underline{\quad}$$

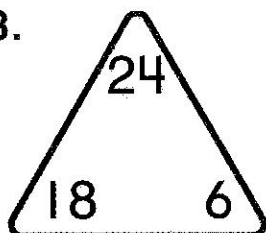
8

13

$$\underline{\quad} + \underline{\quad} = \underline{\quad}$$

$$\underline{\quad} - \underline{\quad} = \underline{\quad}$$

3.



$$\underline{\quad} + \underline{\quad} = \underline{\quad}$$

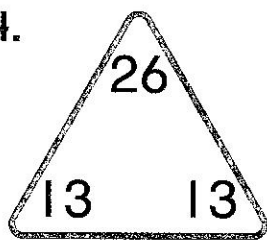
$$\underline{\quad} - \underline{\quad} = \underline{\quad}$$

$$\underline{\quad} + \underline{\quad} = \underline{\quad}$$

$$\underline{\quad} - \underline{\quad} = \underline{\quad}$$

Complete the fact family.

4.



$$\underline{\quad} + \underline{\quad} = \underline{\quad} \quad \underline{\quad} - \underline{\quad} = \underline{\quad}$$

Use what you know about fact families to solve.

5. Marcus counts 24 children playing.
11 of the children are boys. How
many girls are playing?

_____ girls



6. There are 49 second graders. 26 of them are
in Miss Johnson's class. How many students
are in Mrs. Stewart's class?

_____ students

Test Practice

7. Which number sentence does not belong in the
fact family for the numbers 7, 18, and 25?

$$18 + 7 = 25$$



$$18 - 25 = 7$$



$$7 + 18 = 25$$



$$25 - 7 = 18$$



Math at Home Have your child write the fact family for the
numbers 22, 13, and 35.