

My Homework

Lesson 3

Regroup a Ten as Ones

Homework Helper

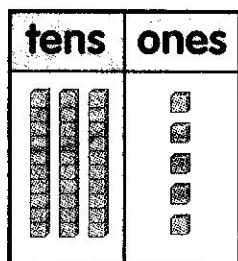


Need help? connectED.mcgraw-hill.com

Find $35 - 7$.

Step 1

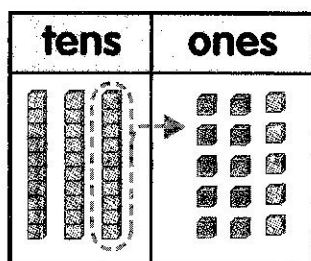
Show 35.



3 tens 5 ones

Step 2


Subtract the ones. There are not enough ones to subtract. Regroup.



2 tens 15 ones

Step 3

Subtract 7 ones.



2 tens 8 ones
 $35 - 7 = 28$

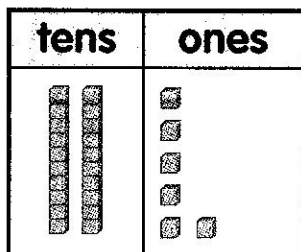
Helpful Hint

If there are not enough ones to subtract, regroup 1 ten as 10 ones.

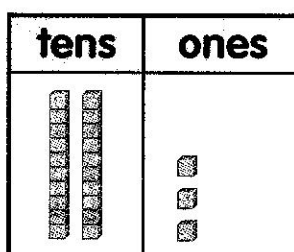
Practice

Regroup the tens. Draw the ones. Cross out cubes to show subtraction. Write the answer.

1. $26 - 9 =$ _____





2. $23 - 5 =$ _____




Regroup the tens. Draw the ones. Cross out cubes to show subtraction. Write the answer.

3. $21 - 7 = \underline{\hspace{2cm}}$



tens	ones
	


4. $30 - 6 = \underline{\hspace{2cm}}$

tens	ones
	

5. There are 42 icicles. 9 of them melt. How many icicles are left?



 icicles

tens	ones
	



6. 31 people are at the skating rink. 8 people go home. How many people are left at the skating rink?

 people

tens	ones
	

Test Practice

7. $23 - 6 = \underline{\hspace{2cm}}$

29



17





13



10



tens	ones
	



Math at Home Have your child use pennies to show you how to subtract 6 from 25.