

Name _____

My Homework


Lesson 1

Hundreds

Homework Helper



Need help? connectED.mcgraw-hill.com

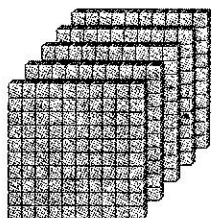


4 hundreds = 40 tens = 400 ones

Practice

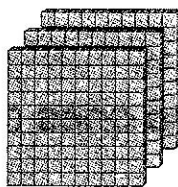
Write how many hundreds, tens, and ones.

1.



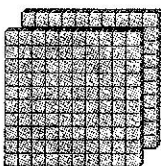
_____ hundreds = _____ tens = _____ ones

2.



_____ hundreds = _____ tens = _____ ones

3.



_____ hundreds = _____ tens = _____ ones

Write how many tens and hundreds.

4. 900 ones = _____ tens = _____ hundreds

Write how many hundreds, tens, or ones.

5. $800 =$ _____ tens

6. $400 =$ _____ ones

7. $700 =$ _____ hundreds

8. $600 =$ _____ tens


Solve. Draw models to help if needed.

9. Katie has 5 pages of star stickers. Each page has 100 stickers. How many star stickers does Katie have in all?

_____ star stickers

10. Avante has 7 baskets of 100 beads. How many hundreds of beads does Avante have?

_____ hundreds



Vocabulary Check



11. Circle the digit that shows **hundreds**. Underline the **ones** digit once. Underline the **tens** digit twice.

600



Math at Home Ask your child to count by hundreds to 1,000.