

Name _____

My Homework

Lesson 2

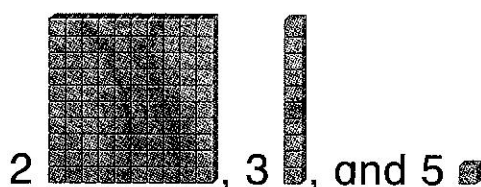
Hundreds, Tens, and Ones

Homework Helper



Need help? connectED.mcgraw-hill.com

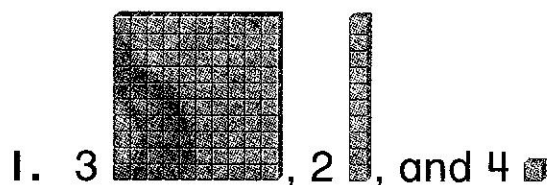
Use hundreds, tens, and ones to show a number.



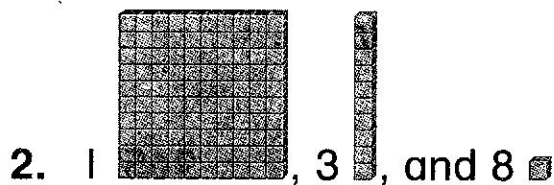
hundreds	tens	ones
2	3	5

Practice

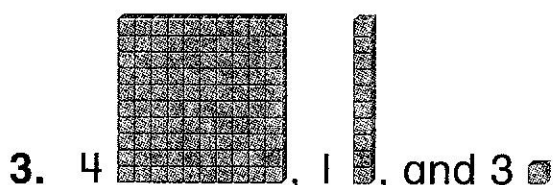
Write how many hundreds, tens, and ones.
 Then write the number.



hundreds	tens	ones



hundreds	tens	ones



hundreds	tens	ones

Write how many hundreds, tens, and ones.

4. $536 =$ _____ hundreds, _____ tens, and _____ ones

5. $295 =$ _____ hundreds, _____ tens, and _____ ones

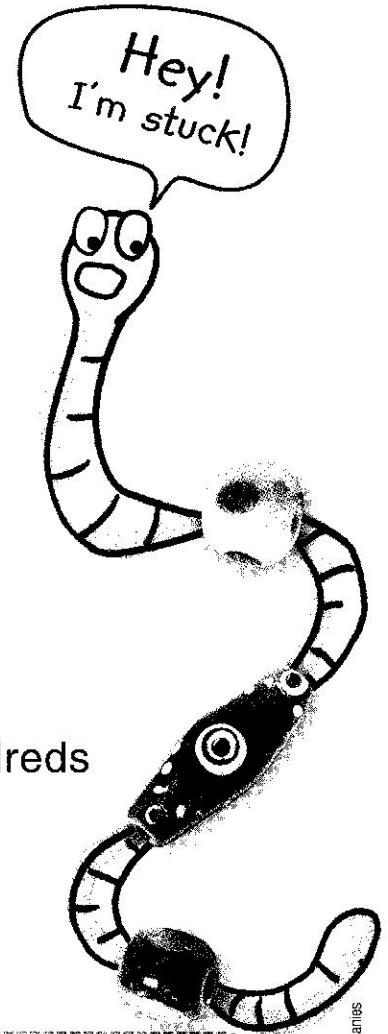
Solve. Draw base-ten blocks to model.

6. Percy has 342 pencils.
How many tens does he have?

_____ tens

7. Luis collected 613 beads.
How many hundreds does he have?

_____ hundreds



Test Practice

8. A number has 6 tens, 9 ones, and 5 hundreds.
What number is it?

695



596



569



965



Math at Home Write the number 647. Ask your child to tell you how many hundreds, tens, and ones are in the number.