

Name _____

My Homework

Lesson 2

Quarters

Homework Helper



Need help? connectED.mcgraw-hill.com

quarter = 25¢



25¢,



50¢,



75¢

Helpful Hint

¢ stands for cents.

Start with the coin that has the greatest value.



25¢,



50¢,



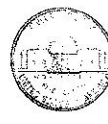
60¢,



70¢,



75¢,



80¢,



81¢

= 81¢

Practice


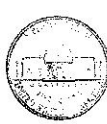
Count to find the value of the coins.

1.




____¢, ____¢, ____¢, ____¢, ____¢, ____¢ = ____¢

2.



____¢, ____¢, ____¢, ____¢, ____¢, ____¢, ____¢ = ____¢

Count to find the value of the coins.



____ ¢, ____ ¢, ____ ¢, ____ ¢, ____ ¢, ____ ¢ = ____ ¢

Circle the correct number of quarters.

4. Jamal wants to donate 75¢ to the animal shelter. How many quarters would that be?




5. Jeff has 3 quarters. His friend has 2 quarters. How many more cents does Jeff have than his friend?

____ ¢



Vocabulary Check



Circle the correct answer.

6. quarter



Math at Home Have your child use quarters to show you 50¢ and 75¢.