

My Homework


Lesson 5

Analyze Bar Graphs

Homework Helper

Need help? connectED.mcgraw-hill.com

You can answer questions using the data from a bar graph.



How many students were surveyed?

12 students were surveyed.

Practice


Use the bar graph to answer the questions.

1. How many people voted for mustard?

2. What topping do most people like?

3. Which topping is liked the least?

4. How many people like mustard or onion? _____




Use the bar graph to answer the questions.

5. How many people have April birthdays?

6. How many birthdays are in February and March?

7. How many people were surveyed in all?

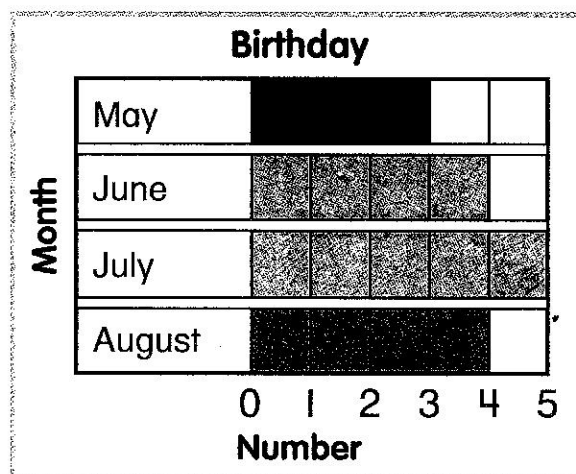
8. Four more people answered the survey. They all had February birthdays. Which month has the most birthdays now?



Test Practice

9. How many birthdays are in May and August?

- | | |
|-----------------------|-----------------------|
| 8 | 7 |
| <input type="radio"/> | <input type="radio"/> |
| 4 | 3 |
| <input type="radio"/> | <input type="radio"/> |



Math at Home Ask your child how he or she analyzed the bar graphs on this page.