

My Review

Chapter 7

Subtract Three-Digit Numbers

Vocabulary Check

place value**regroup****subtract**

Write the correct word in the blank.

1. To identify the value of the digit 9 in the numbers 976, 93, and 9, use what you know about _____.
2. You can _____ to find the difference.
3. To take a number apart and write it a new way is to _____.



Concept Check



Subtract.

4. $600 - 400 =$ _____

5. $700 - 600 =$ _____

Hooray,
we're free!



Subtract.

$$\begin{array}{r} 6. \quad 800 \\ - 400 \\ \hline \end{array}$$

$$\begin{array}{r} 7. \quad 900 \\ - 600 \\ \hline \end{array}$$

$$\begin{array}{r} 8. \quad 773 \\ - 100 \\ \hline \end{array}$$

$$\begin{array}{r} 9. \quad 261 \\ - 10 \\ \hline \end{array}$$

$$\begin{array}{r} 10. \quad 938 \\ - 329 \\ \hline \end{array}$$

$$\begin{array}{r} 11. \quad 885 \\ - 16 \\ \hline \end{array}$$

$$\begin{array}{r} 12. \quad 357 \\ - 189 \\ \hline \end{array}$$

$$\begin{array}{r} 13. \quad 987 \\ - 598 \\ \hline \end{array}$$

$$\begin{array}{r} 14. \quad 201 \\ - 124 \\ \hline \end{array}$$

Rewrite the problem. Subtract.

$$15. \quad 385 - 166$$

$$16. \quad 247 - 189$$

$$17. \quad 925 - 638$$

Subtract.

$$\begin{array}{r} 18. \quad 400 \\ - 254 \\ \hline \end{array}$$


$$\begin{array}{r} 19. \quad 700 \\ - 443 \\ \hline \end{array}$$

$$\begin{array}{r} 20. \quad 300 \\ - 165 \\ \hline \end{array}$$

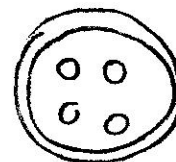
Name



Problem Solving

I  buttons!

21. There are 620 buttons. 200 of them are square. The rest are round. How many buttons are round?



_____ buttons

22. Clara had 359 pennies. She lost some. Now she has 266 pennies. How many pennies did Clara lose?



_____ pennies

Test Practice

23. There are 334 cars in the parking lot on Sunday. On Monday, there are 182 cars. How many more cars were there on Sunday?

334



182



152



150





Show the ways to subtract three-digit numbers.

Subtract hundreds.

$$800 - 500 = \underline{\hspace{2cm}}$$

Regroup tens to subtract.

$$\begin{array}{r} 835 \\ - 726 \\ \hline \end{array}$$

ESSENTIAL
QUESTION



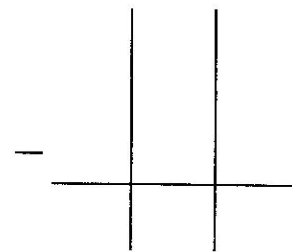
How can I subtract three-digit numbers?

Regroup tens and hundreds to subtract.

$$\begin{array}{r} 935 \\ - 397 \\ \hline \end{array}$$

Rewrite to subtract.

$$381 - 298$$



You are part of this equation!

You + School = Cool