

Name _____

My Review

Chapter 5

Place Value to
1,000

Vocabulary Check



Draw lines to match.

1. expanded form

498
↑

2. hundreds

>

3. equal to

1,000
↑

4. greater than

=

5. less than

700 + 30 + 6

6. thousand

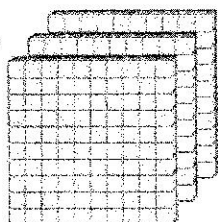
<

Concept Check



Write how many hundreds, tens, and ones.

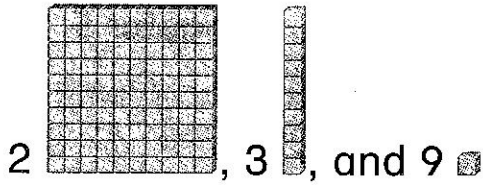
7.



_____ hundreds = _____ tens = _____ ones

Write how many hundreds, tens, and ones.
Then write the number.

8.



hundreds	tens	ones

Write the number in expanded form.
Then write the number.

9. 5 hundreds, 6 tens, and 0 ones

$$\underline{\hspace{2cm}} + \underline{\hspace{2cm}} + \underline{\hspace{2cm}} = \underline{\hspace{2cm}}$$

10. 8 hundreds, 7 tens, and 8 ones

$$\underline{\hspace{2cm}} + \underline{\hspace{2cm}} + \underline{\hspace{2cm}} = \underline{\hspace{2cm}}$$

Write the number.

11. six hundred twenty-nine

12. five hundred one

Compare. Write $>$, $<$, or $=$.

13. 100 \bigcirc 1,000

14. 468 \bigcirc 406

15. 711 \bigcirc 711

16. 394 \bigcirc 294

Reflect

Chapter 5

Answering the
Essential Question



Show the ways you can use place value.

Write the number.
seven hundred sixty-three

Write the number in
expanded form.

233

_____ + _____ + _____

ESSENTIAL
QUESTION




How can I use place
value?

Compare.


763 ○ 637

Write the missing numbers.

560, _____, 580, _____



Name _____



Problem Solving

17. Malika has 9 sheets of stickers. Tonya has 7 sheets of stickers. 100 stickers are on each sheet. Who has more stickers?

18. Show another way to write six hundred twenty-three.

_____ + _____ + _____

19. Sam has 998 markers. Write the number words to show how many markers.

_____ markers

Test Practice

20. Leah has 368 sunflower seeds. How many hundreds does she have?

3
☐

6
☐

8
☐

368
☐